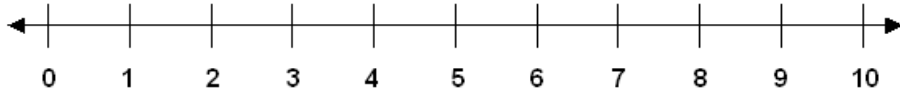


Addition Facts: Skill 1-2B

Sums 3 and 4**Directions:** Add. Use the number line to count on to add.

(add by counting pictures on pages 5 – 7)



$$\begin{array}{r} 0 \\ + 3 \\ \hline \end{array}$$

$$\begin{array}{r} 3 \\ + 0 \\ \hline \end{array}$$

$$\begin{array}{r} 1 \\ + 3 \\ \hline \end{array}$$

$$\begin{array}{r} 1 \\ + 2 \\ \hline \end{array}$$

$$\begin{array}{r} 2 \\ + 1 \\ \hline \end{array}$$

$$\begin{array}{r} 0 \\ + 4 \\ \hline \end{array}$$

$$\begin{array}{r} 2 \\ + 2 \\ \hline \end{array}$$

$$\begin{array}{r} 3 \\ + 1 \\ \hline \end{array}$$

$$\begin{array}{r} 0 \\ + 3 \\ \hline \end{array}$$

$$\begin{array}{r} 1 \\ + 2 \\ \hline \end{array}$$

$$\begin{array}{r} 2 \\ + 0 \\ \hline \end{array}$$

$$\begin{array}{r} 1 \\ + 2 \\ \hline \end{array}$$

$$\begin{array}{r} 1 \\ + 3 \\ \hline \end{array}$$

$$\begin{array}{r} 2 \\ + 2 \\ \hline \end{array}$$

$$\begin{array}{r} 2 \\ + 1 \\ \hline \end{array}$$

$$\begin{array}{r} 4 \\ + 0 \\ \hline \end{array}$$

$$\begin{array}{r} 3 \\ + 1 \\ \hline \end{array}$$

$$\begin{array}{r} 0 \\ + 3 \\ \hline \end{array}$$

$$\begin{array}{r} 0 \\ + 4 \\ \hline \end{array}$$

$$\begin{array}{r} 1 \\ + 2 \\ \hline \end{array}$$

$$\begin{array}{r} 2 \\ + 1 \\ \hline \end{array}$$

$$\begin{array}{r} 2 \\ + 2 \\ \hline \end{array}$$

$$\begin{array}{r} 1 \\ + 3 \\ \hline \end{array}$$

$$\begin{array}{r} 3 \\ + 0 \\ \hline \end{array}$$

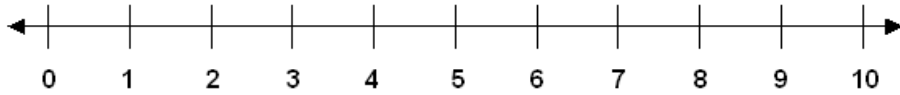
$$\begin{array}{r} 0 \\ + 3 \\ \hline \end{array}$$

Addition Facts: Skill 1-2B

Sums 3 and 4

Directions: Add. Use the number line to count on to add.

(add by counting pictures on pages 5 – 7)



$$\begin{array}{r} 1 \\ + 3 \\ \hline \end{array}$$

$$\begin{array}{r} 2 \\ + 1 \\ \hline \end{array}$$

$$\begin{array}{r} 2 \\ + 2 \\ \hline \end{array}$$

$$\begin{array}{r} 0 \\ + 4 \\ \hline \end{array}$$

$$\begin{array}{r} 0 \\ + 3 \\ \hline \end{array}$$

$$\begin{array}{r} 2 \\ + 2 \\ \hline \end{array}$$

$$\begin{array}{r} 1 \\ + 3 \\ \hline \end{array}$$

$$\begin{array}{r} 2 \\ + 1 \\ \hline \end{array}$$

$$\begin{array}{r} 3 \\ + 1 \\ \hline \end{array}$$

$$\begin{array}{r} 2 \\ + 2 \\ \hline \end{array}$$

$$\begin{array}{r} 3 \\ + 0 \\ \hline \end{array}$$

$$\begin{array}{r} 1 \\ + 2 \\ \hline \end{array}$$

$$\begin{array}{r} 1 \\ + 3 \\ \hline \end{array}$$

$$\begin{array}{r} 2 \\ + 1 \\ \hline \end{array}$$

$$\begin{array}{r} 0 \\ + 4 \\ \hline \end{array}$$

$$\begin{array}{r} 0 \\ + 3 \\ \hline \end{array}$$

$$\begin{array}{r} 3 \\ + 0 \\ \hline \end{array}$$

$$\begin{array}{r} 3 \\ + 1 \\ \hline \end{array}$$

$$\begin{array}{r} 1 \\ + 2 \\ \hline \end{array}$$

$$\begin{array}{r} 2 \\ + 1 \\ \hline \end{array}$$

$$\begin{array}{r} 0 \\ + 4 \\ \hline \end{array}$$

$$\begin{array}{r} 4 \\ + 0 \\ \hline \end{array}$$

$$\begin{array}{r} 1 \\ + 2 \\ \hline \end{array}$$

$$\begin{array}{r} 1 \\ + 3 \\ \hline \end{array}$$

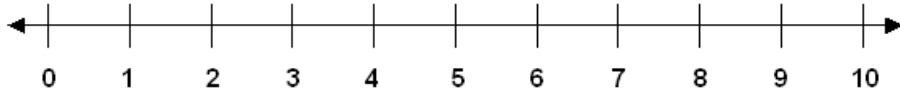
$$\begin{array}{r} 1 \\ + 2 \\ \hline \end{array}$$

Addition Facts: Skill 1-2B

Sums 3 and 4

Directions: Add. Use the number line to count on to add.

(add by counting pictures on pages 5 – 7)



$0 + 3 =$ $0 + 2 =$ $1 + 2 =$ $2 + 1 =$

$0 + 4 =$ $4 + 0 =$ $2 + 2 =$ $1 + 2 =$

$3 + 1 =$ $1 + 3 =$ $2 + 1 =$ $1 + 3 =$

$0 + 3 =$ $0 + 4 =$ $3 + 0 =$ $1 + 3 =$

$1 + 2 =$ $3 + 1 =$ $1 + 3 =$ $1 + 2 =$

$3 + 1 =$ $1 + 3 =$ $1 + 2 =$ $0 + 3 =$

$0 + 0 =$ $0 + 2 =$ $1 + 1 =$ $0 + 2 =$

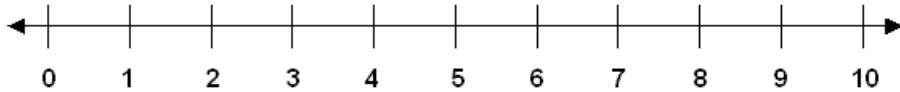
$1 + 3 =$ $3 + 1 =$ $2 + 1 =$ $1 + 2 =$

Addition Facts: Skill 1-2B

Sums 3 and 4

Directions: Add. Use the number line to count on to add.

(add by counting pictures on pages 5 – 7)



$2 + 1 =$ $2 + 2 =$ $3 + 1 =$ $3 + 0 =$

$2 + 1 =$ $1 + 3 =$ $1 + 2 =$ $2 + 2 =$

$3 + 0 =$ $4 + 0 =$ $3 + 1 =$ $0 + 4 =$

$1 + 3 =$ $3 + 0 =$ $2 + 2 =$ $1 + 2 =$

$1 + 3 =$ $0 + 4 =$ $4 + 0 =$ $2 + 1 =$

$0 + 3 =$ $0 + 2 =$ $1 + 2 =$ $3 + 1 =$

$0 + 0 =$ $2 + 2 =$ $1 + 3 =$ $0 + 4 =$

$1 + 2 =$ $2 + 1 =$ $3 + 1 =$ $1 + 3 =$

Addition Facts: Skill 1-2B

Sums 3 and 4

Directions: Add.

$3 + 0 =$



$0 + 3 =$



$2 + 1 =$



$1 + 2 =$



$4 + 0 =$



$2 + 2 =$



$3 + 1 =$



$3 + 0 =$




$1 + 3 =$



$1 + 2 =$



$1 + 2 =$





$2 + 1 =$







Addition Facts: Skill 1-2B



Sums 3 and 4



Directions: Add.



$0 + 4 =$ 	$3 + 1 =$ 
--	---

$2 + 1 =$ 	$1 + 2 =$ 
---	--

$3 + 0 =$ 	$2 + 2 =$ 
---	---

$1 + 2 =$ 	$3 + 1 =$ 
--	---

$2 + 1 =$ 	$3 + 0 =$ 
---	---

$1 + 2 =$ 	$0 + 3 =$ 
--	--

Addition Facts: Skill 1-2B

Sums 3 and 4

Directions: Add.

$0 + 4 =$



$3 + 1 =$



$2 + 2 =$



$4 + 0 =$



$1 + 3 =$



$1 + 2 =$



$3 + 1 =$



$0 + 3 =$



$2 + 2 =$



$1 + 3 =$



$2 + 1 =$



$2 + 2 =$

