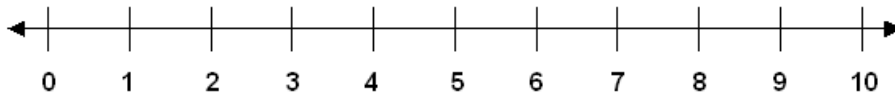


Subtraction Facts
Skill 1-3C

Subtracting from 4 and 5

Directions: Subtract. Use the number line to count back to subtract.

(subtract with pictures on pages 4 - 5)



1.

$$\begin{array}{r} 4 \\ - 0 \\ \hline \end{array}$$

2.

$$\begin{array}{r} 4 \\ - 1 \\ \hline \end{array}$$

3.

$$\begin{array}{r} 4 \\ - 4 \\ \hline \end{array}$$

4.

$$\begin{array}{r} 4 \\ - 3 \\ \hline \end{array}$$

5.

$$\begin{array}{r} 4 \\ - 2 \\ \hline \end{array}$$

6.

$$\begin{array}{r} 4 \\ - 0 \\ \hline \end{array}$$

7.

$$\begin{array}{r} 4 \\ - 1 \\ \hline \end{array}$$

8.

$$\begin{array}{r} 4 \\ - 2 \\ \hline \end{array}$$

9.

$$\begin{array}{r} 5 \\ - 0 \\ \hline \end{array}$$

10.

$$\begin{array}{r} 5 \\ - 1 \\ \hline \end{array}$$

11.

$$\begin{array}{r} 5 \\ - 2 \\ \hline \end{array}$$

12.

$$\begin{array}{r} 5 \\ - 5 \\ \hline \end{array}$$

13.

$$\begin{array}{r} 5 \\ - 3 \\ \hline \end{array}$$

14.

$$\begin{array}{r} 5 \\ - 4 \\ \hline \end{array}$$

15.

$$\begin{array}{r} 5 \\ - 2 \\ \hline \end{array}$$

16.

$$\begin{array}{r} 5 \\ - 1 \\ \hline \end{array}$$

17.

$$\begin{array}{r} 5 \\ - 0 \\ \hline \end{array}$$

18.

$$\begin{array}{r} 4 \\ - 3 \\ \hline \end{array}$$

19.

$$\begin{array}{r} 4 \\ - 4 \\ \hline \end{array}$$

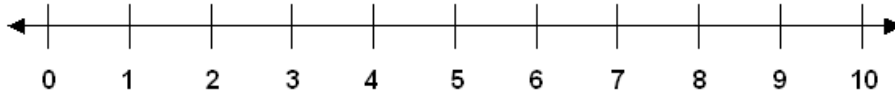
20.

$$\begin{array}{r} 5 \\ - 1 \\ \hline \end{array}$$

Subtraction Facts
Skill 1-3C

Subtracting from 4 and 5

Directions: Subtract. Use the number line to count back to subtract.
(subtract with pictures on pages 4 - 5)



21.

$$\begin{array}{r} 5 \\ -2 \\ \hline \end{array}$$

22.

$$\begin{array}{r} 4 \\ -0 \\ \hline \end{array}$$

23.

$$\begin{array}{r} 4 \\ -2 \\ \hline \end{array}$$

24.

$$\begin{array}{r} 5 \\ -2 \\ \hline \end{array}$$

25.

$$\begin{array}{r} 5 \\ -4 \\ \hline \end{array}$$

26.

$$\begin{array}{r} 5 \\ -3 \\ \hline \end{array}$$

27.

$$\begin{array}{r} 4 \\ -3 \\ \hline \end{array}$$

28.

$$\begin{array}{r} 4 \\ -1 \\ \hline \end{array}$$

29.

$$\begin{array}{r} 5 \\ -3 \\ \hline \end{array}$$

30.

$$\begin{array}{r} 5 \\ -5 \\ \hline \end{array}$$

31.

$$\begin{array}{r} 5 \\ -0 \\ \hline \end{array}$$

32.

$$\begin{array}{r} 5 \\ -1 \\ \hline \end{array}$$

33.

$$\begin{array}{r} 5 \\ -2 \\ \hline \end{array}$$

34.

$$\begin{array}{r} 4 \\ -3 \\ \hline \end{array}$$

35.

$$\begin{array}{r} 4 \\ -1 \\ \hline \end{array}$$

36.

$$\begin{array}{r} 5 \\ -5 \\ \hline \end{array}$$

37.

$$\begin{array}{r} 5 \\ -0 \\ \hline \end{array}$$

38.

$$\begin{array}{r} 4 \\ -2 \\ \hline \end{array}$$

39.

$$\begin{array}{r} 4 \\ -4 \\ \hline \end{array}$$

40.

$$\begin{array}{r} 5 \\ -3 \\ \hline \end{array}$$

Subtraction Facts

Skill 1-3C

Subtracting from 4 and 5

Directions: Subtract. Use the number line to count back to subtract.
(subtract with pictures on pages 4 - 5)



41. $4 - 3 =$ 42. $4 - 1 =$ 43. $4 - 2 =$ 44. $4 - 0 =$

45. $4 - 4 =$ 46. $5 - 0 =$ 47. $5 - 5 =$ 48. $5 - 3 =$

49. $5 - 2 =$ 50. $5 - 4 =$ 51. $5 - 1 =$ 52. $4 - 3 =$

53. $4 - 2 =$ 54. $4 - 1 =$ 55. $4 - 0 =$ 56. $4 - 2 =$

57. $5 - 4 =$ 58. $4 - 3 =$ 59. $4 - 0 =$ 60. $5 - 0 =$

61. $4 - 3 =$ 62. $5 - 3 =$ 63. $5 - 1 =$ 64. $4 - 4 =$

65. $5 - 4 =$ 66. $4 - 1 =$ 67. $4 - 3 =$ 68. $4 - 2 =$

Subtraction Facts

Skill 1-3C

Subtracting from 4 and 5

Directions: Subtract. Cross out pictures to subtract.


$4 - 0 =$




$4 - 3 =$




$4 - 1 =$




$4 - 2 =$




$4 - 4 =$




$5 - 0 =$




$5 - 1 =$




$5 - 4 =$




$5 - 3 =$




$5 - 5 =$



$5 - 2 =$



$4 - 2 =$




$4 - 1 =$



$5 - 0 =$



$5 - 2 =$



Subtraction Facts Skill 1-3C


Subtracting from 4 and 5

Directions: Subtract. Cross out pictures to subtract.


$5 - 4 =$



$4 - 3 =$




$4 - 4 =$



$5 - 1 =$



$5 - 3 =$




$5 - 2 =$




$4 - 2 =$



$5 - 1 =$




$4 - 0 =$



$5 - 2 =$



$5 - 5 =$



$4 - 4 =$



$5 - 5 =$



$4 - 4 =$



$5 - 5 =$

