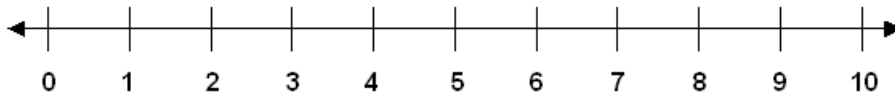


Subtraction Facts
Skill 1-3D

Subtracting from 6

Directions: Subtract. Use the number line to count back to subtract.
(subtract with pictures on pages 4 - 5)



1.

$$\begin{array}{r} 6 \\ -3 \\ \hline \end{array}$$

2.

$$\begin{array}{r} 6 \\ -2 \\ \hline \end{array}$$

3.

$$\begin{array}{r} 6 \\ -4 \\ \hline \end{array}$$

4.

$$\begin{array}{r} 6 \\ -1 \\ \hline \end{array}$$

5.

$$\begin{array}{r} 6 \\ -0 \\ \hline \end{array}$$

6.

$$\begin{array}{r} 6 \\ -6 \\ \hline \end{array}$$

7.

$$\begin{array}{r} 6 \\ -5 \\ \hline \end{array}$$

8.

$$\begin{array}{r} 6 \\ -3 \\ \hline \end{array}$$

9.

$$\begin{array}{r} 6 \\ -2 \\ \hline \end{array}$$

10.

$$\begin{array}{r} 6 \\ -1 \\ \hline \end{array}$$

11.

$$\begin{array}{r} 6 \\ -5 \\ \hline \end{array}$$

12.

$$\begin{array}{r} 6 \\ -4 \\ \hline \end{array}$$

13.

$$\begin{array}{r} 6 \\ -1 \\ \hline \end{array}$$

14.

$$\begin{array}{r} 6 \\ -0 \\ \hline \end{array}$$

15.

$$\begin{array}{r} 6 \\ -6 \\ \hline \end{array}$$

16.

$$\begin{array}{r} 6 \\ -5 \\ \hline \end{array}$$

17.

$$\begin{array}{r} 6 \\ -0 \\ \hline \end{array}$$

18.

$$\begin{array}{r} 6 \\ -6 \\ \hline \end{array}$$

19.

$$\begin{array}{r} 6 \\ -3 \\ \hline \end{array}$$

20.

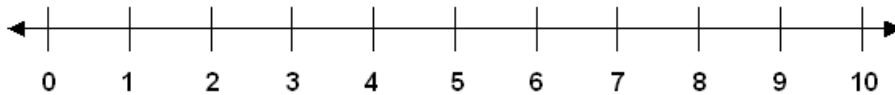
$$\begin{array}{r} 6 \\ -2 \\ \hline \end{array}$$

Subtraction Facts

Skill 1-3D

Subtracting from 6

Directions: Subtract. Use the number line to count back to subtract.
(subtract with pictures on pages 4 - 5)



21.

$$\begin{array}{r} 6 \\ -1 \\ \hline \end{array}$$

22.

$$\begin{array}{r} 6 \\ -5 \\ \hline \end{array}$$

23.

$$\begin{array}{r} 6 \\ -4 \\ \hline \end{array}$$

24.

$$\begin{array}{r} 6 \\ -3 \\ \hline \end{array}$$

25.

$$\begin{array}{r} 6 \\ -2 \\ \hline \end{array}$$

26.

$$\begin{array}{r} 6 \\ -1 \\ \hline \end{array}$$

27.

$$\begin{array}{r} 6 \\ -6 \\ \hline \end{array}$$

28.

$$\begin{array}{r} 6 \\ -5 \\ \hline \end{array}$$

29.

$$\begin{array}{r} 6 \\ -3 \\ \hline \end{array}$$

30.

$$\begin{array}{r} 6 \\ -0 \\ \hline \end{array}$$

31.

$$\begin{array}{r} 6 \\ -2 \\ \hline \end{array}$$

32.

$$\begin{array}{r} 6 \\ -3 \\ \hline \end{array}$$

33.

$$\begin{array}{r} 6 \\ -0 \\ \hline \end{array}$$

34.

$$\begin{array}{r} 6 \\ -1 \\ \hline \end{array}$$

35.

$$\begin{array}{r} 6 \\ -4 \\ \hline \end{array}$$

36.

$$\begin{array}{r} 6 \\ -2 \\ \hline \end{array}$$

37.

$$\begin{array}{r} 6 \\ -3 \\ \hline \end{array}$$

38.

$$\begin{array}{r} 6 \\ -1 \\ \hline \end{array}$$

39.

$$\begin{array}{r} 6 \\ -4 \\ \hline \end{array}$$

40.

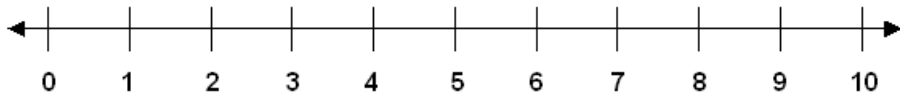
$$\begin{array}{r} 6 \\ -6 \\ \hline \end{array}$$

Subtraction Facts

Skill 1-3D

Subtracting from 6

Directions: Subtract. Use the number line to count back to subtract.
(subtract with pictures on pages 4 - 5)



41.
 $6 - 0 =$

42.
 $6 - 4 =$

43.
 $6 - 2 =$

44.
 $6 - 3 =$

45.
 $6 - 1 =$

46.
 $6 - 4 =$

47.
 $6 - 5 =$

48.
 $6 - 6 =$

49.
 $6 - 2 =$

50.
 $6 - 0 =$

51.
 $6 - 1 =$

52.
 $6 - 4 =$

53.
 $6 - 5 =$

54.
 $6 - 2 =$

55.
 $6 - 1 =$

56.
 $6 - 6 =$

57.
 $6 - 4 =$

58.
 $6 - 5 =$

59.
 $6 - 3 =$

60.
 $6 - 2 =$

61.
 $6 - 5 =$

62.
 $6 - 3 =$

63.
 $6 - 4 =$

64.
 $6 - 3 =$

65.
 $6 - 0 =$

66.
 $6 - 2 =$

67.
 $6 - 5 =$

68.
 $6 - 1 =$

Subtraction Facts


Skill 1-3D

Subtracting from 6

Directions: Subtract. Cross out pictures to subtract.


69.

$$6 - 0 =$$




70.

$$6 - 3 =$$




71.

$$6 - 4 =$$




72.

$$6 - 2 =$$




73.

$$6 - 1 =$$




74.

$$6 - 5 =$$




75.

$$6 - 0 =$$




76.

$$6 - 6 =$$




77.

$$6 - 3 =$$




78.

$$6 - 5 =$$




79.

$$6 - 1 =$$




80.

$$6 - 2 =$$




81.

$$6 - 6 =$$




82.

$$6 - 0 =$$



83.

$$6 - 4 =$$



Subtraction Facts


Skill 1-3D

Subtracting from 6

Directions: Subtract. Cross out pictures to subtract.


84.

$$6 - 3 =$$




85.

$$6 - 5 =$$




86.

$$6 - 2 =$$




87.

$$6 - 1 =$$




88.

$$6 - 4 =$$




89.

$$6 - 6 =$$




90.

$$6 - 0 =$$




91.

$$6 - 6 =$$




92.

$$6 - 4 =$$




93.

$$6 - 5 =$$




94.

$$6 - 2 =$$



95.

$$6 - 1 =$$



96.

$$6 - 3 =$$



97.

$$6 - 4 =$$



98.

$$6 - 6 =$$



Answer Key: Skill 1-3D

1. 3	2. 4	3. 2	4. 5	5. 6
6. 0	7. 1	8. 3	9. 4	10. 5
11. 1	12. 2	13. 5	14. 6	15. 0
16. 1	17. 6	18. 0	19. 3	20. 4
21. 5	22. 1	23. 2	24. 3	25. 4
26. 5	27. 0	28. 1	29. 3	30. 6
31. 4	32. 3	33. 6	34. 5	35. 2
36. 4	37. 3	38. 5	39. 2	40. 0
41. 6	42. 2	43. 4	44. 3	
45. 5	46. 2	47. 1	48. 0	
49. 4	50. 6	51. 5	52. 2	
53. 1	54. 4	55. 5	56. 0	
57. 2	58. 1	59. 3	60. 4	
61. 1	62. 3	63. 2	64. 3	
65. 6	66. 4	67. 1	68. 5	
69. 6	70. 3	71. 2		
72. 4	73. 5	74. 1		
75. 6	76. 0	77. 3		
78. 1	79. 5	80. 4		
81. 0	82. 6	83. 2		
84. 3	85. 1	86. 4		
87. 5	88. 2	89. 0		
90. 6	91. 0	92. 2		
93. 1	94. 4	95. 5		
96. 3	97. 2	98. 0		