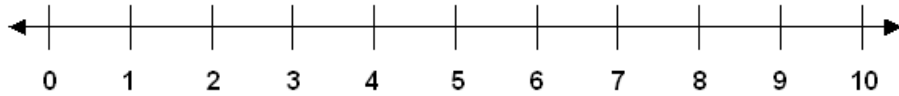


Subtraction Facts: Skill 1- 4E

Subtracting from 10**Directions:** Subtract.

(subtract with pictures on pages 4 - 5)



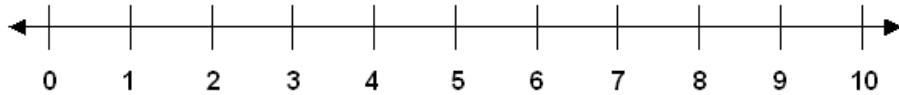
1. $\begin{array}{r} 10 \\ -7 \\ \hline \end{array}$	2. $\begin{array}{r} 10 \\ -3 \\ \hline \end{array}$	3. $\begin{array}{r} 10 \\ -10 \\ \hline \end{array}$	4. $\begin{array}{r} 10 \\ -2 \\ \hline \end{array}$	5. $\begin{array}{r} 10 \\ -1 \\ \hline \end{array}$
6. $\begin{array}{r} 10 \\ -9 \\ \hline \end{array}$	7. $\begin{array}{r} 10 \\ -4 \\ \hline \end{array}$	8. $\begin{array}{r} 10 \\ -9 \\ \hline \end{array}$	9. $\begin{array}{r} 10 \\ -6 \\ \hline \end{array}$	10. $\begin{array}{r} 10 \\ -5 \\ \hline \end{array}$
11. $\begin{array}{r} 10 \\ -0 \\ \hline \end{array}$	12. $\begin{array}{r} 10 \\ -8 \\ \hline \end{array}$	13. $\begin{array}{r} 10 \\ -2 \\ \hline \end{array}$	14. $\begin{array}{r} 10 \\ -5 \\ \hline \end{array}$	15. $\begin{array}{r} 10 \\ -8 \\ \hline \end{array}$
16. $\begin{array}{r} 10 \\ -3 \\ \hline \end{array}$	17. $\begin{array}{r} 10 \\ -6 \\ \hline \end{array}$	18. $\begin{array}{r} 10 \\ -4 \\ \hline \end{array}$	19. $\begin{array}{r} 10 \\ -1 \\ \hline \end{array}$	20. $\begin{array}{r} 10 \\ -7 \\ \hline \end{array}$
21. $\begin{array}{r} 10 \\ -2 \\ \hline \end{array}$	22. $\begin{array}{r} 10 \\ -0 \\ \hline \end{array}$	23. $\begin{array}{r} 10 \\ -10 \\ \hline \end{array}$	24. $\begin{array}{r} 10 \\ -5 \\ \hline \end{array}$	25. $\begin{array}{r} 10 \\ -1 \\ \hline \end{array}$

Subtraction Facts: Skill 1- 4E

Subtracting from 10

Directions: Subtract.

(subtract with pictures on pages 4 - 5)



26.

$$\begin{array}{r} 10 \\ - 10 \\ \hline \end{array}$$

27.

$$\begin{array}{r} 10 \\ - 5 \\ \hline \end{array}$$

28.

$$\begin{array}{r} 10 \\ - 9 \\ \hline \end{array}$$

29.

$$\begin{array}{r} 10 \\ - 0 \\ \hline \end{array}$$

30.

$$\begin{array}{r} 10 \\ - 6 \\ \hline \end{array}$$

31.

$$\begin{array}{r} 10 \\ - 8 \\ \hline \end{array}$$

32.

$$\begin{array}{r} 10 \\ - 1 \\ \hline \end{array}$$

33.

$$\begin{array}{r} 10 \\ - 10 \\ \hline \end{array}$$

34.

$$\begin{array}{r} 10 \\ - 5 \\ \hline \end{array}$$

35.

$$\begin{array}{r} 10 \\ - 4 \\ \hline \end{array}$$

36.

$$\begin{array}{r} 10 \\ - 7 \\ \hline \end{array}$$

37.

$$\begin{array}{r} 10 \\ - 3 \\ \hline \end{array}$$

38.

$$\begin{array}{r} 10 \\ - 2 \\ \hline \end{array}$$

39.

$$\begin{array}{r} 10 \\ - 4 \\ \hline \end{array}$$

40.

$$\begin{array}{r} 10 \\ - 8 \\ \hline \end{array}$$

41.

$$\begin{array}{r} 10 \\ - 5 \\ \hline \end{array}$$

42.

$$\begin{array}{r} 10 \\ - 1 \\ \hline \end{array}$$

43.

$$\begin{array}{r} 10 \\ - 2 \\ \hline \end{array}$$

44.

$$\begin{array}{r} 10 \\ - 9 \\ \hline \end{array}$$

45.

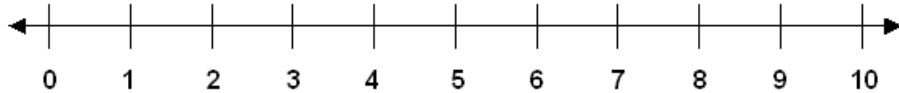
$$\begin{array}{r} 10 \\ - 5 \\ \hline \end{array}$$

Subtraction Facts: Skill 1- 4E

Subtracting from 10

Directions: Subtract.

(subtract with pictures on pages 4 - 5)



46.
 $10 - 3 =$

47.
 $10 - 9 =$

48.
 $10 - 2 =$

49.
 $10 - 5 =$

50.
 $10 - 8 =$

51.
 $10 - 7 =$

52.
 $10 - 6 =$

53.
 $10 - 4 =$

54.
 $10 - 3 =$

55.
 $10 - 1 =$

56.
 $10 - 10 =$

57.
 $10 - 0 =$

58.
 $10 - 5 =$

59.
 $10 - 2 =$

60.
 $10 - 8 =$

61.
 $10 - 7 =$

62.
 $10 - 3 =$

63.
 $10 - 10 =$

64.
 $10 - 6 =$

65.
 $10 - 9 =$

66.
 $10 - 0 =$

67.
 $10 - 8 =$

68.
 $10 - 4 =$

69.
 $10 - 5 =$

70.
 $10 - 9 =$

71.
 $10 - 1 =$

72.
 $10 - 10 =$

73.
 $10 - 0 =$

74.
 $10 - 3 =$

75.
 $10 - 2 =$

76.
 $10 - 7 =$

77.
 $10 - 6 =$

Subtraction Facts: Skill 1- 4E

Subtracting from 10

Directions: Subtract. Cross out the pictures that you subtract.


1.

$10 - 2 =$



2.

$10 - 8 =$




3.

$10 - 3 =$




4.

$10 - 5 =$




5.

$10 - 1 =$




6.

$10 - 6 =$




7.

$10 - 4 =$




8.

$10 - 7 =$



9.

$10 - 9 =$



10.

$10 - 10 =$



11.

$10 - 0 =$



12.

$10 - 2 =$




13.

$10 - 8 =$



14.

$10 - 3 =$



15.

$10 - 9 =$



Subtraction Facts: Skill 1- 4E

Subtracting from 10

Directions: Subtract. Cross out the pictures that you subtract.


16.

$10 - 4 =$




17.

$10 - 6 =$




18.

$10 - 7 =$




19.

$10 - 3 =$



20.

$10 - 10 =$




21.

$10 - 5 =$




22.

$10 - 9 =$



23.

$10 - 0 =$



24.

$10 - 8 =$



25.

$10 - 2 =$



26.

$10 - 9 =$



27.

$10 - 1 =$



28.

$10 - 7 =$



29.

$10 - 4 =$



30.

$10 - 6 =$



Answer Key 1- 4E

1.	3	2.	7	3.	0	4.	8	5.	9
6.	1	7.	6	8.	1	9.	4	10.	5
11.	10	12.	2	13.	8	14.	5	15.	2
16.	7	17.	4	18.	6	19.	9	20.	3
21.	8	22.	10	23.	0	24.	5	25.	9
26.	0	27.	5	28.	1	29.	10	30.	4
31.	2	32.	9	33.	0	34.	5	35.	6
36.	3	37.	7	38.	8	39.	6	40.	2
41.	5	42.	9	43.	8	44.	1	45.	5
46.	7	47.	1	48.	8	49.	5		
50.	2	51.	3	52.	4	53.	6		
54.	7	55.	9	56.	0	57.	10		
58.	5	59.	8	60.	2	61.	3		
62.	7	63.	0	64.	4	65.	1		
66.	10	67.	2	68.	6	69.	5		
70.	1	71.	9	72.	0	73.	10		
74.	7	75.	8	76.	3	77.	4		
1.	8	2.	2	3.	7				
4.	5	5.	9	6.	4				
7.	6	8.	3	9.	1				
10.	0	11.	10	12.	8				
13.	2	14.	7	15.	1				
16.	6	17.	4	18.	3				
19.	7	20.	0	21.	5				
22.	1	23.	10	24.	2				
25.	8	26.	1	27.	9				
28.	3	29.	6	30.	4				