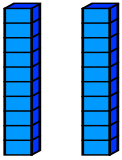


Place Value
Skill 1-9A

Count by Tens

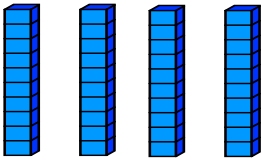
Directions: Write how many tens. Then write the number that the tens make.

Example



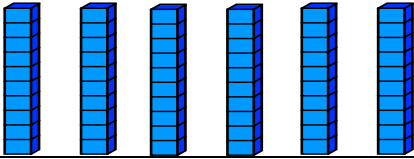
tens		twenty
2	=	20

1.



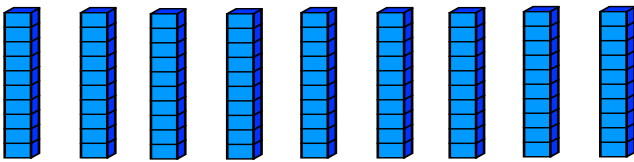
tens		forty
	=	

2.



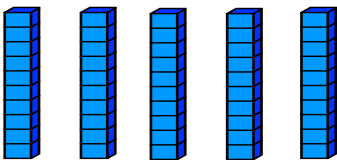
tens		sixty
	=	

3.



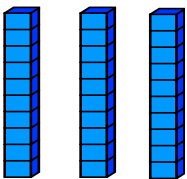
tens		ninety
	=	

4.



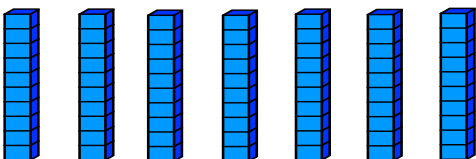
tens		fifty
	=	

5.



tens		thirty
	=	

6.



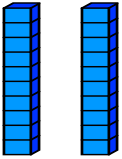
tens		seventy
	=	

Place Value
Skill 1-9A

Count by Tens

Directions: Write how many tens. Then write the number that the tens make.

7.

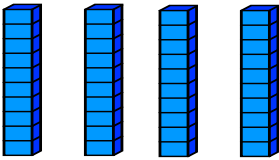


tens

twenty

=

8.

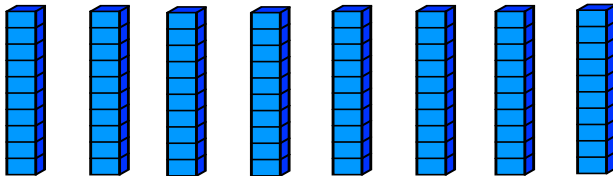


tens

forty

=

9.

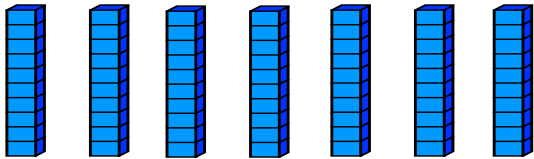


tens

eighty

=

10.

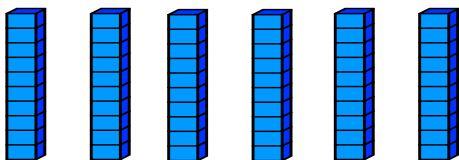


tens

seventy

=

11.

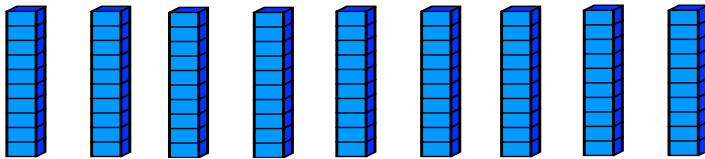


tens

sixty

=

12.

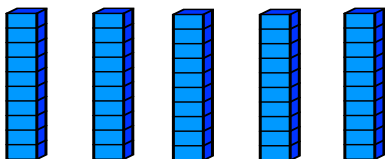


tens

ninety

=

13.



tens

fifty

=

Place Value
Skill 1-9A

Count by Tens

Directions: Write how many tens. Then write the number that the tens make.

14. 

tens	=	forty

15. 

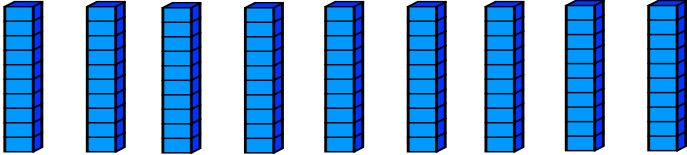
tens	=	seventy

16. 

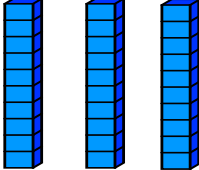
tens	=	sixty

17. 

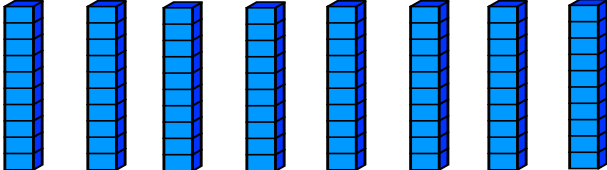
tens	=	fifty

18. 

tens	=	ninety

19. 

tens	=	thirty

20. 

tens	=	eighty

Answer Key
Skill 1-9A

Pg 1

1. 4 tens = 40

2. 6 tens = 60

3. 9 tens = 90

4. 5 tens = 50

5. 3 tens = 30

6. 7 tens = 70

Pg 2

7. 2 tens = 20

8. 4 tens = 40

9. 8 tens = 80

10. 7 tens = 70

11. 6 tens = 60

12. 9 tens = 90

13. 5 tens = 50

Pg 3

14. 4 tens = 40

15. 7 tens = 70

16. 6 tens = 60

17. 5 tens = 50

18. 9 tens = 90

19. 3 tens = 30

20. 8 tens = 80