

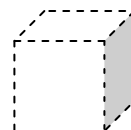
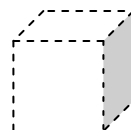
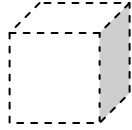
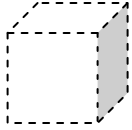
Three-Dimensional Shapes

Skill 1-14A

Cube

Directions: Trace the cubes.

1.



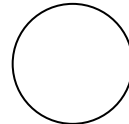
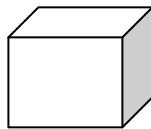
Directions: Circle the cube.

2.



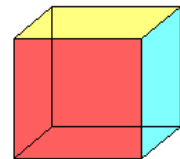
Directions: Color the cube blue.

3.



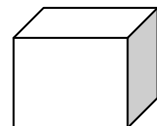
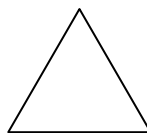
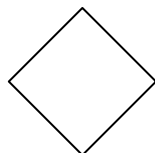
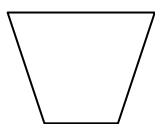
4.

A cube is a three-dimensional figure.



Directions: Circle the three-dimensional figure.

5.

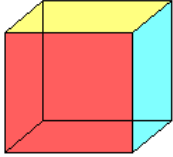


Three-Dimensional Shapes

Skill 1-14A

Cube

6.



A face is a flat surface.

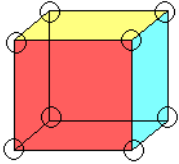
How many faces does a cube have? circle one

2 faces

4 faces

6 faces

7.

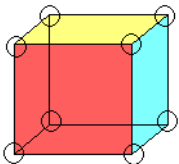


A vertex is a point where three edges meet.

Count the vertices on the cube. The vertices are circled.

A cube has 8 vertices.

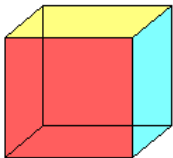
8.



This cube has each vertex circled.

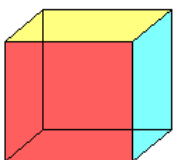
How many vertices are there? _____

9.



Circle each vertex on the cube.

10.



How many vertices does a cube have? Circle one.

4 vertices

6 vertices

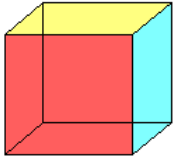
8 vertices

Three-Dimensional Shapes

Skill 1-14A

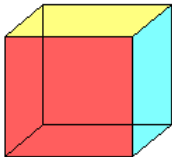
Cube

11.



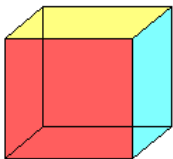
A cube has 8 vertices. Circle each vertex.

12.



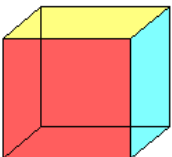
A face is a flat surface.

13.



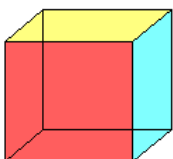
How many faces does a cube have? _____

14.



Circle each vertex on the cube.

15.




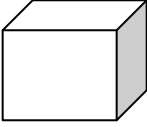
How many vertices does a cube have? Circle one.

4 vertices

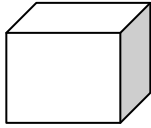
6 vertices

8 vertices

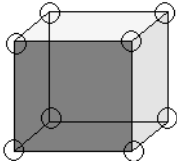
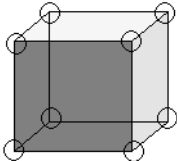
Answer Key
Skill 1-14A

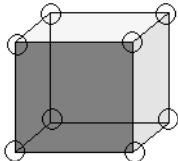
1. no answer	2. 	3. 	4. no answer
---------------------	---	--	---------------------

pg. 2

5. 	6. 6 faces	7. no answer	8. 8 vertices
---	-------------------	---------------------	----------------------

pg. 3

9. 	10. 8 vertices	11. 	12. no answer
---	-----------------------	---	----------------------

13. 6 faces	14. 	15. 8 vertices
--------------------	--	-----------------------