







Money Skill 1-21H

Quarters

Directions: Count the coins. Write the total in the box. Complete problem number 1 first.





1.

25 ¢
30 ¢
_____ ¢
_____ ¢
_____ ¢
_____ ¢

¢






2.

_____ ¢
_____ ¢
_____ ¢
_____ ¢
_____ ¢

¢






3.

_____ ¢
_____ ¢
_____ ¢
_____ ¢
_____ ¢

¢

4.

_____ ¢
_____ ¢
_____ ¢
_____ ¢
_____ ¢

¢

Money
Skill 1-21H

Quarters

Directions: Count the coins. Write the total in the box.

5.



¢

_____ ¢

_____ ¢

_____ ¢

_____ ¢

_____ ¢

_____ ¢

6.



¢

_____ ¢

_____ ¢

_____ ¢

_____ ¢

_____ ¢

_____ ¢

7.



¢

_____ ¢

_____ ¢

_____ ¢

_____ ¢

_____ ¢

_____ ¢

8.



¢

_____ ¢

_____ ¢

_____ ¢

_____ ¢

_____ ¢

_____ ¢

Money
Skill 1-21H

Quarters

Directions: Count the coins. Write the total in the box.

9.



¢

_____ ¢

_____ ¢

_____ ¢

_____ ¢

_____ ¢

_____ ¢

10.



¢

_____ ¢

_____ ¢

_____ ¢

_____ ¢

_____ ¢

_____ ¢

11.



¢

_____ ¢

_____ ¢

_____ ¢

_____ ¢

_____ ¢

_____ ¢

12.



¢

_____ ¢

_____ ¢

_____ ¢

_____ ¢

_____ ¢

_____ ¢

Answer Key
Skill 1-21H

Pg 1

1. 38¢ 2. 50¢ 3. 41¢ 4. 60¢

Pg 2

5. 48¢ 6. 61¢ 7. 52¢ 8. 42¢

Pg 3

9. 70¢ 10. 46¢ 11. 65¢ 12. 43¢

Copyright © freemathprogram.com All rights reserved.