
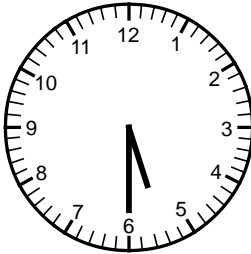
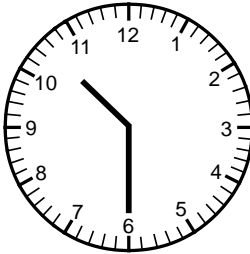



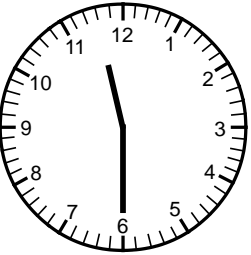
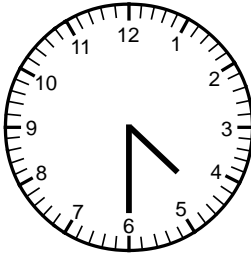



Time
Skill 1-22B

Read a Clock: Time to the Half Hour

Directions: Write the time on the lines below.

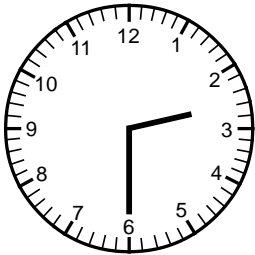
<p>1. Example</p>  <p><u>8:30</u></p>	<p>2.</p>  <p>⋮</p> <hr/>	<p>3.</p>  <p>⋮</p> <hr/>
<p>4.</p>  <p>⋮</p> <hr/>	<p>5.</p>  <p>⋮</p> <hr/>	<p>6.</p>  <p>⋮</p> <hr/>
<p>7.</p>  <p>⋮</p> <hr/>	<p>8.</p>  <p>⋮</p> <hr/>	<p>9.</p>  <p>⋮</p> <hr/>

Time
Skill 1-22B

Read a Clock: Time to the Half Hour

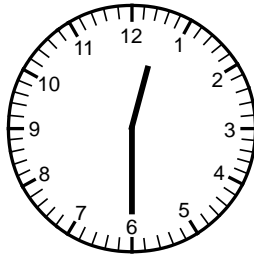
Directions: Write the time on the lines below.

10.



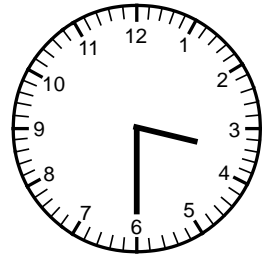
:

11.




:

12.



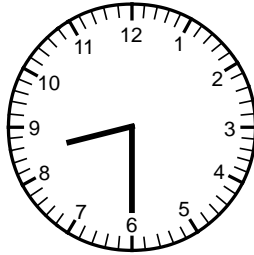
:

13.



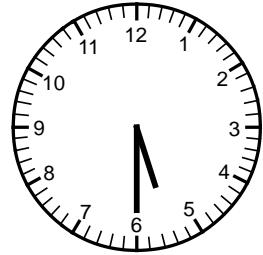
:

14.



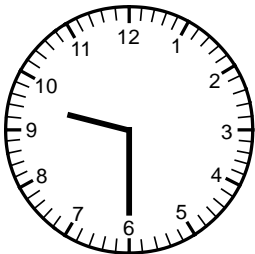
:

15.



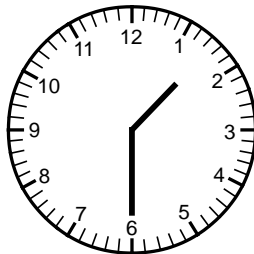
:

16.



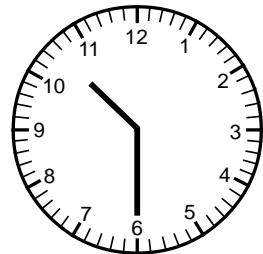
:

17.



:

18.



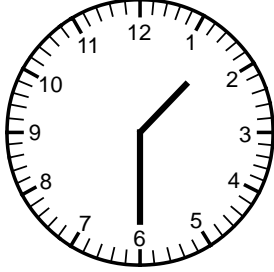
:

Time
Skill 1-22B

Read a Clock: Time to the Half Hour

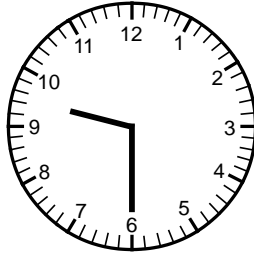
Directions: Write the time on the lines below.

19.




⋮

20.



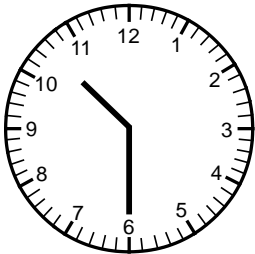
⋮

21.



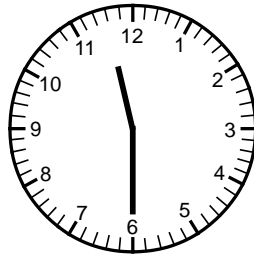
⋮

22.



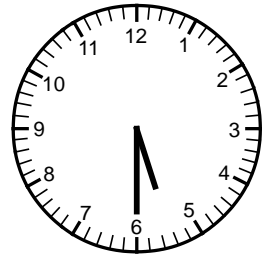
⋮

23.



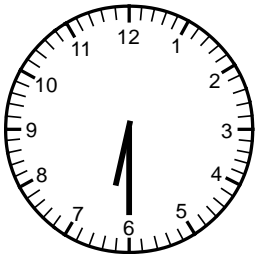
⋮

24.



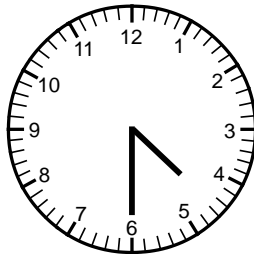
⋮

25.




⋮

26.



⋮

27.



⋮

Answer Key
Skill 1- 22B

Pg 1

1. 8:30

2. 5:30

3. 10:30

4. 7:30

5. 9:30

6. 3:30

7. 11:30

8. 4:30

9. 1:30

Pg 2

10. 2:30

11. 12:30

12. 3:30

13. 7:30

14. 8:30

15. 5:30

16. 9:30

17. 1:30

18. 10:30

Pg 3

19. 1:30

20. 9:30

21. 8:30

22. 10:30

23. 11:30

24. 5:30

25. 6:30

26. 4:30

27. 7:30